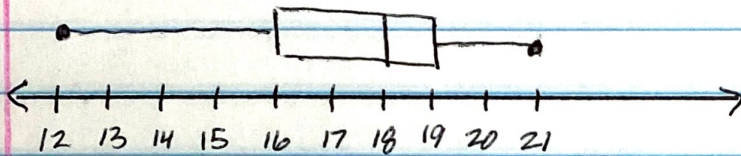


Unit 5- Extra Practice #3.


For each set of data:

- 1) determine if there are any ~~answers~~ ^{outliers} & justify your answer mathematically, and
- 2) tell which measure of central tendency (mean or median) is the most appropriate measure of center. Explain your answer.

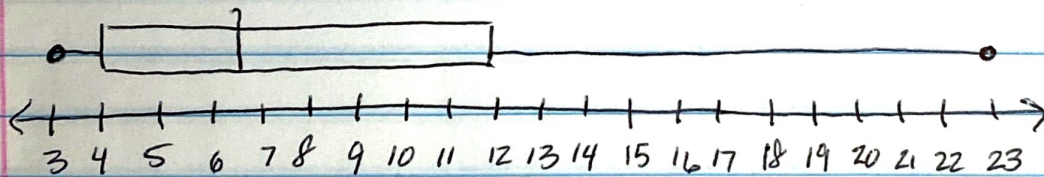
①



②



③



④

